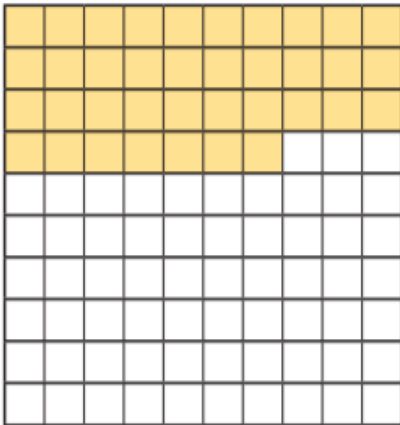




# Bonds to 100 (tens and ones)



1 Here is a hundred square.




How many squares are shaded?

How many squares are not shaded?

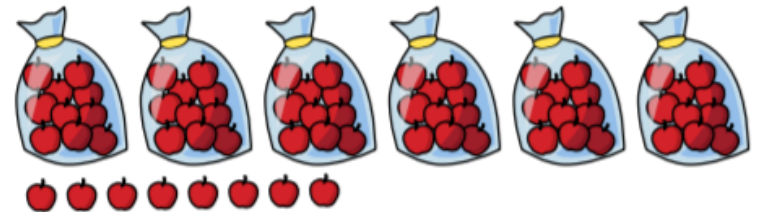
$$\square + \square = 100$$

2 Eva has made 100 using base 10. She has spilt paint on it.



Draw the missing pieces of base 10

3 Mrs Harris has these apples for Sports Day.




She needs 100 apples.

How many more apples does Mrs Harris need?



- 4 Complete the bar model.



- 5 Complete the calculations.

a)  $40 + \square = 100$     e)  $100 - 50 = \square$

b)  $\square + 70 = 100$     f)  $100 - 37 = \square$

c)  $100 = \square + 72$     g)  $\square = 100 - 22$

d)  $100 = 28 + \square$     h)  $8 = 100 - \square$

- 6 A coat costs £100

Mr Farmer has £58

How much more money does Mr Farmer need to buy the coat?

- 7 Whitney is working out  $38 + \square = 100$



The missing number is 72 because I need 2 more ones and 7 more tens.

Do you agree with Whitney? \_\_\_\_\_

Explain your answer

---

---

Talk about it with a partner.

